


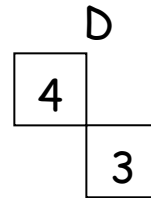
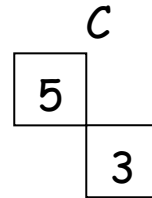
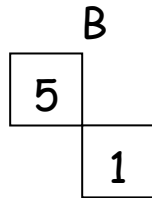
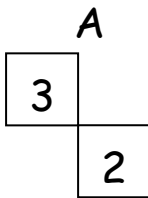
Monday 6th April



Each square below has several tiles missing. Choose which pattern (A, B, C or D) should be placed onto the square to maintain the patterns within the square.

1)

7	6	4
?	4	2
4	?	1



2)

1	2	4
2	4	?
3	?	12

